

P530/1
Biology
Paper 1
July/August, 2022
2 ½ hours



UGANDA MUSLIM TEACHERS' ASSOCIATION
UMTA JOINT MOCK EXAMINATIONS – 2022

NAME.....

INDEX NO.....SIGNATURE.....

UGANDA ADVANCED CERTIFICATE OF EDUCATION
Biology Paper one
2 Hours 30 Minutes

INSTRUCTIONS TO CANDIDATES:

- Answer all questions in sections A and B
- Answers to section A must be written as letters in the corresponding columns.
- Answers to section B must be written in the spaces provided

FOR EXAMINERS USE ONLY

SECTIONS	MARKS
A: 1 – 40	
B: 41	
42	
43	
44	
45	
46	

SECTION A

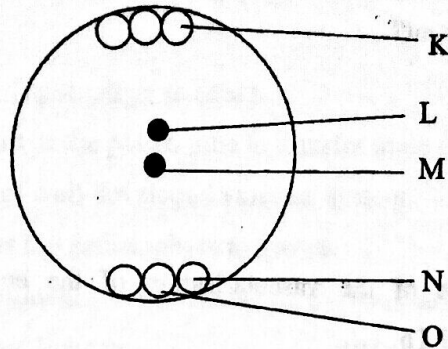
1. Which one of the processes aids the absorption of amino acids after eating a heavy proteinaceous meal?
 - A. Active transport and diffusion.
 - B. Diffusion and osmosis.
 - C. Diffusion and pinocytosis.
 - D. Active transport only.☐
2. Of the following pairs of responses in plants, which one is caused by unequal distribution of auxins?
 - A. Phototropism and abscission.
 - B. Geotropism and phototropism.
 - C. Photoperiodism and phototropism.
 - D. Nastic movement and geotropism.☐
3. Which one of the following is true of linked characteristics? They
 - A. Are always transmitted as a single block.
 - B. Are allelic to one another.
 - C. Occur on non-homologous chromosomes.
 - D. Can be transmitted independently.☐
4. The amount of progesterone in the blood increases steadily from the time of ovulation to menstruation, then begins to decline. This is because...
 - A. Implantation of the zygote occurs.
 - B. It is washed out with blood during menstruation.
 - C. Luteinising hormone inhibits its production.
 - D. Its work of repairing the uterine wall gets complete.☐
5. What is the main advantage of the C4 pathway during the process of photosynthesis?
 - A. Fix carbon dioxide in the carbon cycle.
 - B. Concentrate carbon dioxide in the cells of leaves.
 - C. Fix carbon dioxide from the atmosphere into the leaves.
 - D. Store carbon dioxide in form of organic acids.☐

6. During flight in insects, upstroke is brought about by?

- A. Contraction of direct flight muscles.
- B. Relaxation of indirect flight muscles.
- C. Contraction of indirect flight muscles.
- D. Sudden up thrust of the body.



7. The figure below represents an ovule of a flowering plant.



A triploid nucleus is formed by the fusion of a male nucleus with

- A. N and M.
- B. L and M.
- C. K and L.
- D. N and O.



8. Which one of the following pairs of events occur together to increase the oxygen concentration in the air sacs of the lungs?

- A. Contraction of diaphragm muscles and internal intercostal muscles.
- B. Relaxation of diaphragm muscles and internal intercostal muscles.
- C. Contraction of diaphragm muscles and external intercostal muscles.
- D. Relaxation of the diaphragm muscles and external intercostal muscles.



9. Which one of the following structures are found in both the xylem and phloem tissues of higher plants?

- A. Sieved tracheids.
- B. Companion cells.
- C. Hollow vessels.
- D. Parenchyma cells.



10. The following are characteristic features of amphibians;

- i. Have moist skins.
- ii. Carry out external fertilisation.
- iii. Use gills at early stages for respiration.
- iv. Use lungs for respiration.

Which one of the following pairs of characteristics limit them from inhabiting a totally terrestrial environment?

- A. (ii) and (iii).
- B. (i) and (ii).
- C. (iii) and (iv).
- D. (i) and (iv).

☐

11. What is the significance of the vascularisation of the endometrium before implantation in mammals? To.....

- A. Prevent menstruation.
- B. Ensure firm attachment of the foetus onto the uterine wall.
- C. Assist in producing hormones that maintain pregnancy.
- D. Facilitate food and oxygen supply to the foetus.

☐

12. The similarities of the skeletal structures of moles, monkeys and whales lead to the conclusion that, they.....

- A. Belong to the same class.
- B. Originate from the same environment.
- C. Evolved convergently.
- D. Descended from a common ancestor.

☐

13. Dioecious plants are very rare inspite of having the advantage of cross pollination because

- A. Anthers and stigma mature at different times.
- B. The male and female plants are usually apart.
- C. Half of the individuals do not produce seeds.
- D. Only few agents of dispersal are involved.

☐

14. Birds have learnt to ignore a scare crow that is left in the same spot for a long period of time. This type of behaviour is called.
- A. Habituation.
 - B. Associative learning.
 - C. Imprinting.
 - D. Conditioning.
15. Which one of the following is an essential feature for successful terrestrial life of flowering plants?
- A. Reduction of sporophyte to seeds.
 - B. Development of the pollen tube to transfer male gamete.
 - C. Possession of well-developed vascular system.
 - D. Reduction of the gametophyte to spores.
16. Which one of the following is not true about the cells of a tissue? They
- A. Have physical linkage.
 - B. Are of the same origin.
 - C. Are of the same type.
 - D. Have similar function.
17. Which one of the following is likely to occur when an actively photosynthesising plant was suddenly removed from light?
- A. No change in the amount of PGAL.
 - B. Accumulation of PGAL.
 - C. Reduction in PGA.
 - D. Accumulation of PGA.
18. In guinea pigs, the allele for rough coat (**R**) is dominant over one for smooth coat (**r**) and that for black coat (**B**) is dominant over one for white coat (**b**). the alleles are for coat type and colour are not linked. A cross between rough black guinea pig and rough white one produced 28 rough black, 31 rough white, 11 smooth black and 10 smooth white. Which one of the following is likely to be the genotype of the parents?

A. RrBb X Rrbb

B. RRBB X RRbb

C. RRBb X Rrbb

D. RrBB X Rrbb

☐

19. The mixing of oxygenated blood and deoxygenated blood in the amphibians is minimised by

A. Rapid contraction of the ventricle.

B. Spongy nature of the heart muscles.

C. Spiral valve in the truncus arteriosus.

D. Columnae carnae in the ventricular walls.

☐

20. In which of the following parts of the chloroplast are water splitting enzymes mostly located?

A. Intergrana.

B. Cytoplasm.

C. Stroma.

D. Grana.

☐

21. Which of the following tissues would be stained deepest red by a dye that contains nuclei red?

A. Sieve tube.

B. Tracheid.

C. Collenchyma.

D. Cambium.

☐

22. Which one of the following is the correct statement about a neurone membrane during resting potential?

A. The inside of the neurone membrane is negatively charged.

B. The Na^+ , K^+ , and Cl^- ions are evenly distributed on either side of the membrane.

C. The concentration of Na^+ ions is greater inside the membrane.

D. The concentration of K^+ ions is greater outside the membrane.

☐

23. A cockroach possesses a respiratory system while the earthworm does not possess one because

- A. Earthworms do not need much oxygen.
- B. The surface volume ratio of the cockroach is small.
- C. Earthworms can be parasitic.
- D. The respiratory system provides shape in a cockroach.

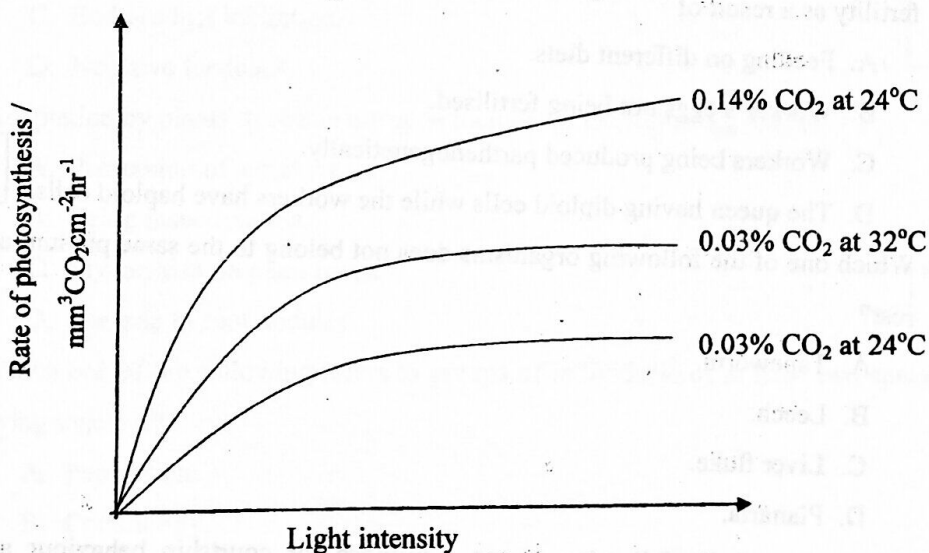
☐

24. The cartilaginous fish retain urea in the blood in order to

- A. Reduce entry of salts into the tissue.
- B. Avoid loss of excess water by excreting it.
- C. Avoid dehydration.
- D. Maintain an internal ionic concentration in balance with the external medium.

☐

25. Which one of the following is illustrated in the figure below?



- A. With increase in light intensity, the rate of photosynthesis increases until the temperature becomes a limiting factor.
- B. Rate of photosynthesis increases with an increase in the carbon dioxide concentration.
- C. With increase in light intensity, the rate of photosynthesis increases indefinitely.
- D. Rate of photosynthesis increases with an increase in light intensity until carbon dioxide concentration becomes a limiting factor.

☐

26. Which one of the following is the ultimate hydrogen acceptor during anaerobic respiration in animals?

- A. Lactate.
- B. NAD.
- C. Pyruvic acid.
- D. Acetaldehyde.

☐

27. Which one of the following is the correct shape, in the region of the body of an earthworm where its circular muscles are contracted?

- A. Short and thick.
- B. Long and thin.
- C. Short and thin.
- D. Long and thick.

☐

28. Worker bees and the queen bee are polymorphic forms which differ in their fertility as a result of

- A. Feeding on different diets.
- B. Worker's eggs not being fertilised.
- C. Workers being produced parthenogenetically.
- D. The queen having diploid cells while the workers have haploid cells.

☐

29. Which one of the following organisms does not belong to the same phylum as the rest?

- A. Tapeworm.
- B. Leech.
- C. Liver fluke.
- D. Planaria.

☐

30. Which one of the following is not a purpose for courtship behaviour among animals?

- A. Ensuring that both partners are sexually mature.
- B. Establishing a pair-bond.
- C. Ensuring that both partners are ready for mating.
- D. Establishing territories.

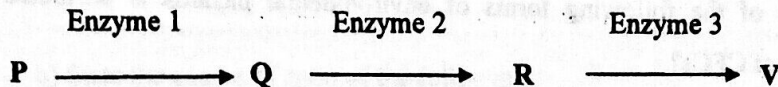
☐

31. Which one of the following adaptations of xerophytes does not reduce transpiration?

- A. Hairy leaves.
- B. Leaves with thick waxy cuticle.
- C. Small sized leaves.
- D. Succulent stems.

☐

32. In a multi-enzyme controlled reaction,



If an excess of V controls the metabolic pathway of the reaction, the control mechanism is known as

- A. Multi-enzyme control.
- B. Excess inhibition.
- C. End product inhibition.
- D. Negative feedback.

☐

33. Adaptation by plants to obtain nitrogen include all the following except

- A. Possession of aerial roots.
- B. Being insectivorous.
- C. Mycorrhiza on plant roots.
- D. Bacteria in root nodules.

☐

34. Which one of the following refers to groups of individuals of at least two species living together?

- A. Population.
- B. Community.
- C. Habitat.
- D. Niche.

☐

35. Net productivity in the C_4 plants is much higher than that in C_3 plants because

- A. C_4 plants have a higher turnover rate.
- B. Energy accumulates at a higher rate in C_4 plants.
- C. Photophosphorylation occurs in C_3 plants.
- D. The rate of respiration is higher in C_3 plants.

☐

36. Which one of the following ecological pyramids may be used to determine productivity in an ecosystem?

- A. Pyramid of energy.
- B. Pyramid of biomass.
- C. Pyramid of numbers.
- D. Pyramid of productivity.

☐

37. Which one of the following forms of environmental hazards is attributed to application of CFCs?

- A. Ozone layer depletion.
- B. Acid rain.
- C. Greenhouse effect.
- D. Eutrophication.

☐

38. Which part of the vestibular apparatus responds to the vertical movement of the head?

- A. Vestibular canal.
- B. Saccul.
- C. Utricle.
- D. Semi-circular canal.

☐

39. Three counts of 103, 46, and 20 of a plant species were made using a quadrant of 25cm^2 . The density of the plant per m^2 is

- A. 169.
- B. 56.3.
- C. 225.
- D. 676.

☐

40. Which one of the following couples is likely to produce a foetus suffering from fatal erythroblastosis?

- A. Rh^+ mother and Rh^- father.
- B. Rh^- mother and Rh^- father.
- C. Rh^+ mother and Rh^+ father.
- D. Rh^- mother and Rh^+ father

☐

SECTION B

41. a) What do you understand by the term apical dominance? (02 marks)

.....

.....

.....

.....

b) State the causes of each of the following:

i. Seed dormancy. (02 marks)

.....

.....

.....

.....

ii. Apical dominance. (02 marks)

.....

.....

.....

.....

c) What is the ecological importance of

I. Seed dormancy. (02 marks)

.....

.....

.....

.....

II. Apical dominance. (02 marks)

.....

.....

.....

.....

42. a) What is meant by the term environmental resistance?

(02 marks)

.....

.....

.....

.....

b) Outline the factors:

i. Affecting biotic potential.

(04 marks)

.....

.....

.....

.....

ii. Hindering biotic potential.

(04 marks)

.....

.....

.....

.....

43. a) What is meant by water stress in relation to plants?

(01 mark)

.....

.....

.....

b) What is the effect of water stress in green plants?

(04 marks)

.....

.....

.....

.....

.....

.....

- c) Outline the structural adaptations of the xylem vessel for long distance transport of water and mineral salts. (05 marks)

.....

.....

.....

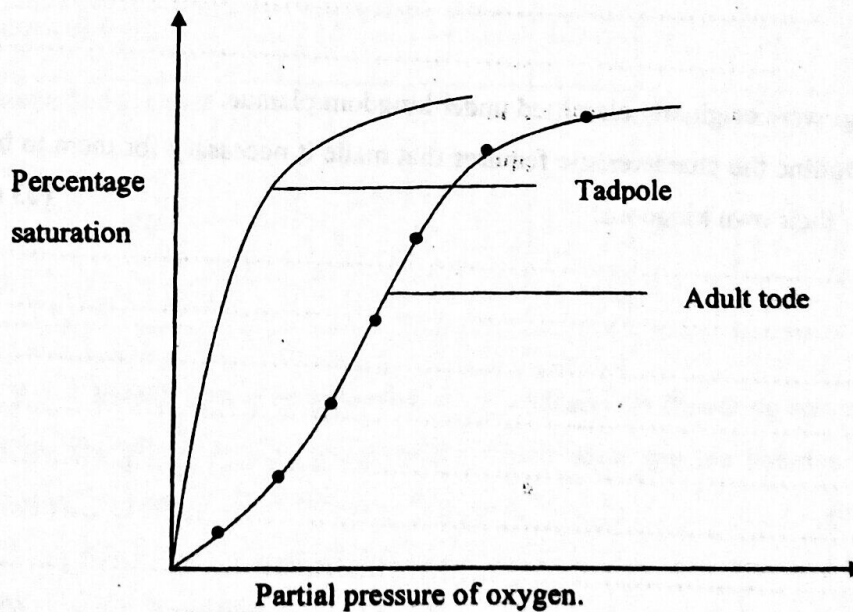
.....

.....

.....

.....

44. The figure below shows oxygen dissociation curves for a tadpole blood and that of an adult toad. Study it carefully and then give responses to the following questions:



- a) Explain the relative position of the curves for the tadpole blood and that of the adult toad. (03 marks)

.....

.....

.....

.....

- b) What advantage is the position of the dissociation curve for the tadpole in its environment? (04 marks)

.....

.....

.....

.....

.....

- c) How is the skin of the adult toad adapted for gaseous exchange? (03 marks)

.....

.....

.....

.....

.....

45. Fungi were originally classified under kingdom plantae.

- a) Outline the characteristic features that made it necessary for them to be placed in their own kingdom. (03 marks)

.....

.....

.....

.....

.....

.....

.....

- b) Explain why fungi are wide spread and in vast numbers. (04 marks)

.....

.....

.....

.....

.....

.....

c) What is the economic importance of fungi?

(03 marks)

.....

.....

.....

.....

.....

46. Three healthy, unrelated species of flowering plants A, B and C were subjected to a range of different light and dark treatments. The results obtained are shown in the table below:

	Treatments					
	1	2	3	4	5	6
Hours of light	15	14	13	12	11	10
Hours of darkness	9	10	11	12	13	14
Species: A	+	+	+	+	-	-
B	-	-	-	-	+	+
C	+	+	+	+	+	+

KEY: + Means flowering occurred - Means No flowering occurred.

a) State the photoperiodic group under which each species belongs and give reasons to support your answer. (03 marks)

- (i) A.....
-
- (ii) B.....
-
- (iii) C.....
-

b) Describe how the phytochrome controls flowering response exhibited in species A and B. (04 marks)

(i) Species

A.....
.....
.....

(ii) Species

B.....
.....
.....

c) What would be the likely effect of flashing light during darkness on each of the specimens? (03 marks)

(i) A.....
.....

(ii) B.....
.....

(iii) C.....
.....

END